


Welcome to Fourth Grade!

JULY 2023

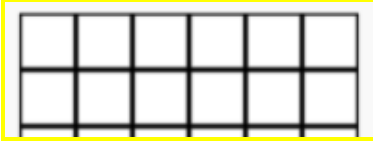



Monday	Tuesday	Wednesday	Thursday	Friday
3 FREE DAY!	4 John started his math homework at 4:20pm and finished at 4:44pm how long did it take him? _____	5 Go to a math website to play a math game Write the math game you played _____ Parent initials _____	6 Write the 7X tables 2 times neatly on a <u>separate sheet</u> of paper.	7 Estimate $288 + 79$
10 Write the fractions from least to greatest $2/3, 2/2, 2/8$	11 Go to a math website to play a math game Write the math game you played _____ Parent initials _____	12 FREE DAY!	13 Practice your multiplication Flashcards for 10 minutes. Parent initials _____	14 $239 + 240 =$
17 Go to a math website to play a math game Write the math game you played _____ Parent initials _____	18 Write the 8X tables 2 times neatly on a <u>separate sheet</u> of paper.	19 $39 + 45 + 72 =$	20 FREE DAY!	21 Write a fraction equivalent to three-thirds.
24 Round 128 to the nearest ten and hundred _____ _____	25 FREE DAY!	26 $200 - 138 =$	27 Go to a math website to play a math game. Write the math game you played _____ Parent initials _____	28 Practice your multiplication Flashcards for 10 minutes. _____ Parent initials



AUGUST 2023



Monday	Tuesday	Wednesday	Thursday	Friday
	1 FREE DAY!	2 Spend 10 minutes on Reflex Math. Set a timer!	3 Find the perimeter: 	4 Write your multiplication facts in chalk outside!
7 $3001 - 456 =$	8 Find the area: 	9 FREE DAY!	10 Go to a math website to play a math game Write the math game you played _____ Parent initials _____	11 Practice your multiplication flashcards for 10 minutes. Parent initials _____
14 Find the exact answer $836 + 239 =$	15 If Casey stopped reading at 5:50 and he read for 48 minutes, what time did he start reading?	16 Go to a math website to play a math game Write the math game you played _____ Parent initials _____	17 Write the 9X tables 2 times neatly on a <u>separate sheet</u> of paper	18 Round 295 to the nearest tens and hundreds _____ _____
21 Write the fractions greatest to least $2/10, 8/10, 3/10$	22 Go to a math website to play a math game Write the math game you played _____ Parent initials _____	23 Practice your multiplication Flashcards for 10 minutes. _____ Parent initials _____	24 FREE DAY!	25 Estimate $139 + 44$
28 $405 - 189 =$	29 Go buy your school supplies!	30 Go to a math website to play a math game Write the math game you played _____ Parent initials _____	31 Use greater than or less than or equal to. $2/8$ _____ $6/8$	